

THE WOODWIND FAMILY 1

Label the diagrams and answer the questions using the words provided below. Then colour the diagrams.

Bell	Metal	Clarinet	Between	Oboe
Flute	Single	Double reed	Cor Anglais	Single reed
Mouth piece	Blowing	Piccolo	Clarinet	



1= 2= 3= 4=

1 The pictures above are of a _____, _____ and an _____

2 This silhouette is of a _____



3 Unscramble this word: IGSONALCRA _____

4 A flute is made of _____

5 This silhouette is of a _____



6 You play a woodwind instrument by _____ through it.

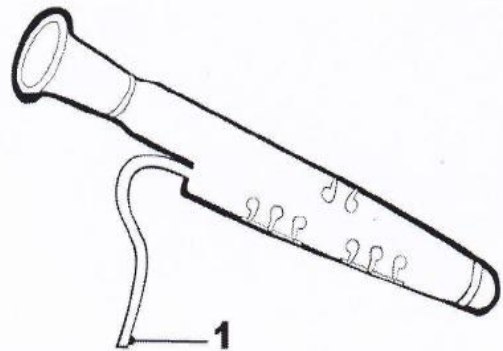
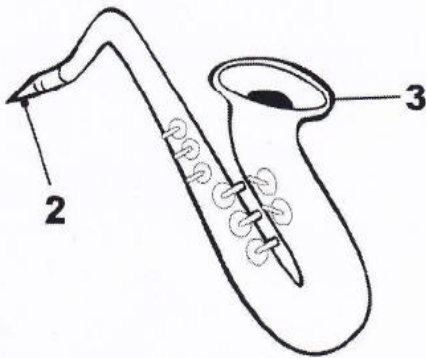
7 In a double reed the air is pushed _____ the reeds.

8 In a _____ reed the air is pushed between the reed and the instrument.

THE WOODWIND FAMILY 2

Label the diagrams and answer the questions using the words provided below. Then colour the diagrams.


Blowing	Single reed	Tenor Saxophone	Air	Bell
Bass clarinet	Double	Double reed	Vibrates	
Bassoon	Single	Saxophone	Metal	



1 =

2 =

3 =

- 1 The pictures above are of a and a
- 2 This silhouette is of a

- 3 Unscramble this word: TOSONERXPONAHE
- 4 A saxophone is made of
- 5 You play a woodwind instrument by through it.
- 6 The reed as is blown through it.
- 7 A double bassoon has a reed.
- 8 A bass clarinet has a reed.